










Name: _____

Date: _____

HOW MANY PUMPKINS?

Count and write the number of pumpkins you see,










 <input type="text"/>	 <input type="text"/>	 <input type="text"/>
 <input type="text"/>	 <input type="text"/>	 <input type="text"/>
 <input type="text"/>	 <input type="text"/>	 <input type="text"/>

Name: _____

Date: _____

HOW MANY PUMPKINS?

Count and write the number of pumpkins you see,










 <input type="text"/>	 <input type="text"/>	 <input type="text"/>
 <input type="text"/>	 <input type="text"/>	 <input type="text"/>
 <input type="text"/>	 <input type="text"/>	 <input type="text"/>

Name: _____

Date: _____

HOW MANY PUMPKINS?

Count and write the number of pumpkins you see,










 <input data-bbox="233 806 321 903" type="text"/>	 <input data-bbox="630 806 717 903" type="text"/>	 <input data-bbox="1024 806 1112 903" type="text"/>
 <input data-bbox="233 1320 321 1417" type="text"/>	 <input data-bbox="630 1320 717 1417" type="text"/>	 <input data-bbox="1024 1320 1112 1417" type="text"/>
 <input data-bbox="233 1835 321 1932" type="text"/>	 <input data-bbox="630 1835 717 1932" type="text"/>	 <input data-bbox="1024 1835 1112 1932" type="text"/>

Name: _____

Date: _____

HOW MANY PUMPKINS?

Count and write the number of pumpkins you see,

 <input data-bbox="235 808 316 903" type="text"/>	 <input data-bbox="625 808 706 903" type="text"/>	 <input data-bbox="1023 808 1104 903" type="text"/>
 <input data-bbox="235 1323 316 1417" type="text"/>	 <input data-bbox="625 1323 706 1417" type="text"/>	 <input data-bbox="1023 1323 1104 1417" type="text"/>
 <input data-bbox="235 1837 316 1932" type="text"/>	 <input data-bbox="625 1837 706 1932" type="text"/>	 <input data-bbox="1023 1837 1104 1932" type="text"/>